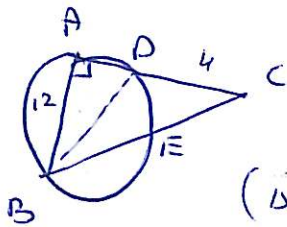


34



(יחסי)  $\angle A = 90^\circ$

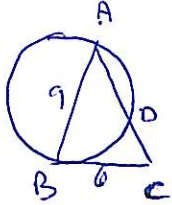
$\downarrow$   
 $BC = BD = 2 \cdot 6.5 = 13$

( $\triangle ABD$  ישרי זווית)  $AD^2 = BD^2 - AB^2 = 13^2 - 12^2 \Rightarrow AD = 5$

( $\triangle ABC$  ישרי זווית)  $BC^2 = AB^2 + AC^2 = 12^2 + 9^2 \Rightarrow BC = 15$

$DC \cdot AC = EC \cdot BC \Rightarrow 4 \cdot 9 = EC \cdot 15 \Rightarrow EC = 2.4$

37



(ישרי זווית)  $BC^2 = AD \cdot DC$

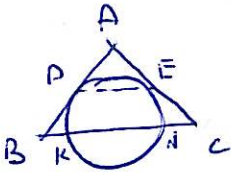
$6^2 = x \cdot 9$

$x = AD = 4, DC = 5$

$AD = x$  / נ"ס  
 $DC = 9 - x$  / נ"ס

$\Leftarrow DC = AC - AD = 10 - 4 = 6$   $\cdot$  נ  
 $BC^2 = AC \cdot DC = 10 \cdot 6 = 60 \Rightarrow BC = \sqrt{60} = 2\sqrt{15}$

40



(משקעים)  $AD = AE$  , (יחסי)  $AB = AC$   
 (ישרי זווית)

$\downarrow$   
 $AB - AD = AC - AE$

$BD = EC$

(משקעים)  $BD^2 = BK \cdot BN$  }  $BK \cdot BN = NC \cdot KC$        $NC = x$  / נ"ס  
 $EC^2 = NC \cdot KC$  }  $y(4+y) = x(9+x)$        $BK = y$   
 $\downarrow$   
 $x = y$

$BC = 15 = BK + KN + NC = 2x + 9 \Rightarrow x = y = NC = BK = 3$

$BD^2 = BK \cdot BN = 3 \cdot 12 \Rightarrow BD = 6 \Rightarrow AD = AB - BD = 9 - 6 = 3$

$\frac{DE}{BC} = \frac{AD}{AB} \Leftarrow$  (ישרי זווית)  $DE \parallel BC \Leftarrow \frac{AD}{AB} = \frac{AE}{AC}$

$\frac{DE}{15} = \frac{3}{9} \Rightarrow DE = 5$